

**Pick a Word**

Use the word or words in the box below to complete each statement.

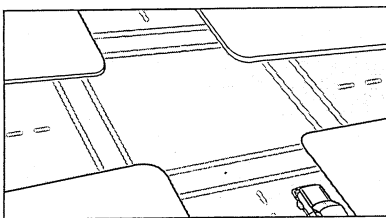
- |                         |                    |                   |
|-------------------------|--------------------|-------------------|
| controlled intersection | fresh green light  | right of way      |
| crossbuck               | gap                | stale green light |
| delayed green light     | point-of-no-return | yielding          |
|                         | joining            | traffic circle    |

- \_\_\_\_\_ 1. The distance between vehicles on a roadway is known as a \_\_\_\_\_.
- \_\_\_\_\_ 2. The privilege of having immediate use of a certain part of the roadway is called \_\_\_\_\_.
- \_\_\_\_\_ 3. Letting others go before you is called \_\_\_\_\_.
- \_\_\_\_\_ 4. An intersection where signs or a signal assign the right of way is known as a \_\_\_\_\_.
- \_\_\_\_\_ 5. A light that has been green for some time is described as a \_\_\_\_\_.
- \_\_\_\_\_ 6. A light that has just turned from red to green is called a \_\_\_\_\_.
- \_\_\_\_\_ 7. Turning right or left into lanes of other vehicles is called \_\_\_\_\_.
- \_\_\_\_\_ 8. The sign before the tracks at a railroad crossing is a \_\_\_\_\_.
- \_\_\_\_\_ 9. A light allowing traffic from one side time to turn or go straight before the light for oncoming traffic turns green is known as a \_\_\_\_\_.
- \_\_\_\_\_ 10. When several roads meet at a circle, the intersection is a \_\_\_\_\_.
- \_\_\_\_\_ 11. When you can no longer stop safely without entering the intersection, you have reached the \_\_\_\_\_.

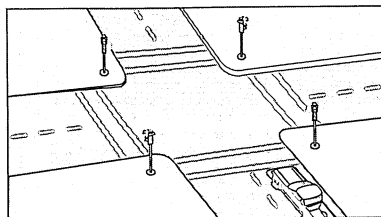
**Match Each Picture**

Study the pictures below. Write the letter for the words that best describe the situation or the type of intersection.

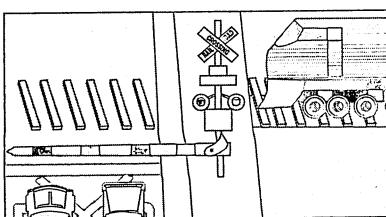
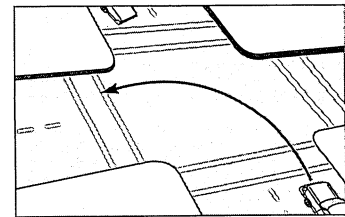
- |                                 |                                   |
|---------------------------------|-----------------------------------|
| A. controlled intersection      | D. uncontrolled intersection      |
| B. controlled railroad crossing | E. uncontrolled railroad crossing |
| C. protected left turn          | F. unprotected left turn          |




1. \_\_\_\_\_



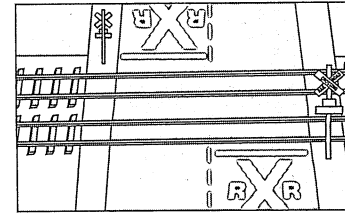
2. \_\_\_\_\_ 3. \_\_\_\_\_



4. \_\_\_\_\_



5. \_\_\_\_\_ 6. \_\_\_\_\_



**Test Your Knowledge**

Check true or false for each statement below.

1. When approaching an intersection, you will need to search the left-front, front, and right-front zones to be certain they are open.
2. Treat an uncontrolled intersection the same way you would a STOP sign.
3. You should search the next intersection beginning at least 12 seconds ahead of time.
4. A green light is always an indication to go because it is clear to do so.
5. All controlled intersections have traffic signals that provide for protected left turns.
6. Vehicles leaving a parking lot must yield to all vehicles and pedestrians.
7. Vehicles turning left at uncontrolled intersections must yield to all oncoming vehicles.
8. Traffic controls give vehicles, but not pedestrians, the right of way.
9. Because right turns take less time, they are more dangerous than left turns.
10. You need about two-thirds of a block in each direction to cross an intersection if traffic on the through street is traveling 30 mph.

	True	False
1.		
2.		
3.		
4.		
5.		
6.		
7.		
8.		
9.		
10.		

**Answer Each Question**

You are approaching an intersection controlled by the traffic signal shown. Check correct or incorrect for each statement.

1. You must stop before reaching the crosswalk.
2. You may turn right after stopping unless a sign prohibits this action.
3. Other drivers should yield the right of way to you when you turn right.
4. You must yield to pedestrians in the crosswalks if you turn right.
5. If oncoming traffic is moving while this light is on, you are at a delayed green light.

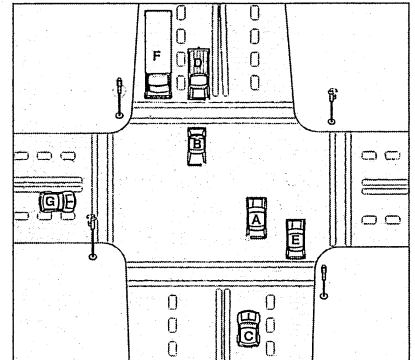


	Correct	Incorrect
1.		
2.		
3.		
4.		
5.		

**Use the Picture**

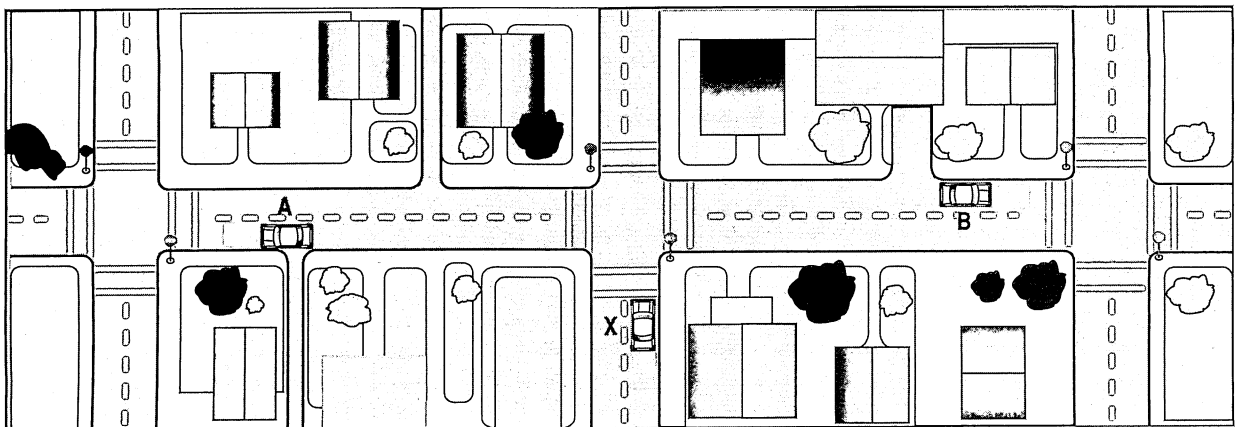
Answer the questions below about traffic flow.

- Which two vehicles should be given the clear right of way?  
 \_\_\_\_\_
- Which vehicle, A or B, will turn left first? Explain why.  
 \_\_\_\_\_
- While waiting to turn, which way should vehicle A's front wheels be pointed? Explain why.  
 \_\_\_\_\_
- Give two reasons why vehicle A should delay its left turn.  
 \_\_\_\_\_  
 \_\_\_\_\_
- Both vehicles B and A complete their left turns. Which vehicle, D or C, should be given the right of way? Why?  
 \_\_\_\_\_  
 \_\_\_\_\_



**Study the Diagram**

Check Yes or No to answer the intersection crossing and joining questions.



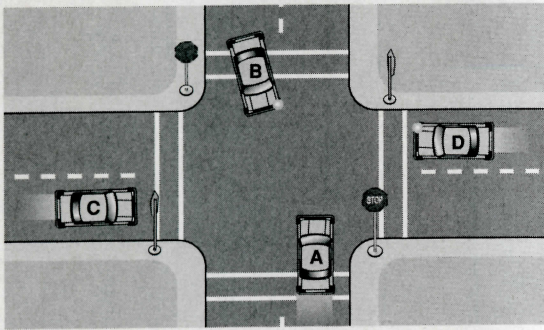
- Do vehicles A and B have to stop?
- Should vehicle X be able to cross the intersection safely if vehicles A and B are both traveling at 25 mph?
- Can vehicle X turn right safely at this time if vehicles A and B are both traveling at 25 mph?
- Can vehicle X turn left safely at this time if vehicles A and B are both traveling at 30 mph?
- Vehicle A is traveling at 25 mph and vehicle B is traveling at 30 mph. Should vehicle X attempt to cross the intersection?

	Yes	No
1.		
2.		
3.		
4.		
5.		



**Use the Pictures**

Answer the questions below.



1. Which vehicle, A or B, should be allowed to go first? Give a reason for your choice?

\_\_\_\_\_

\_\_\_\_\_

2. Which vehicle, C or D, should go last? Why?

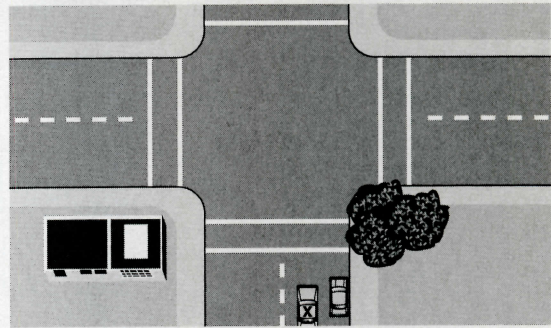
\_\_\_\_\_

\_\_\_\_\_

3. When should vehicle D turn right? Why?

\_\_\_\_\_

\_\_\_\_\_



4. What type of intersection is this?

\_\_\_\_\_

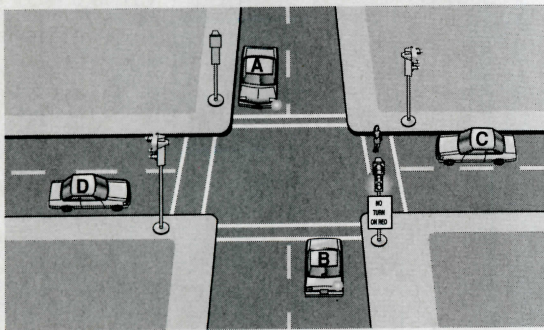
5. What hazards make identification of the type of intersection difficult?

\_\_\_\_\_

6. How might the driver of vehicle X identify the type of intersection?

\_\_\_\_\_

\_\_\_\_\_



7. What sign prohibits vehicle B from turning?

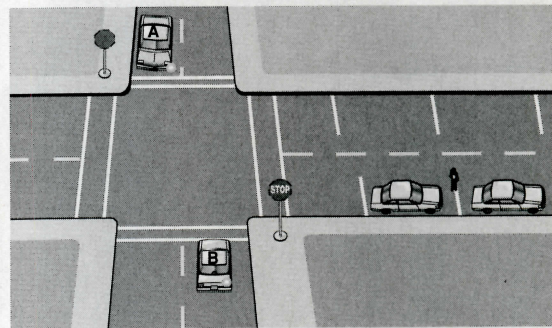
\_\_\_\_\_

\_\_\_\_\_

8. Vehicles C and D have a fresh green light. To whom should vehicle C yield?

\_\_\_\_\_

\_\_\_\_\_



9. Can vehicle B legally turn right?

\_\_\_\_\_

10. What conflict might the driver of vehicle B not be able to predict at this point?

\_\_\_\_\_

\_\_\_\_\_

10